



Holiday Assignments


Primary Section

Mathematics – Worksheet - 4

Grade 02

English medium

1. Colour the similar shapes with the given colours



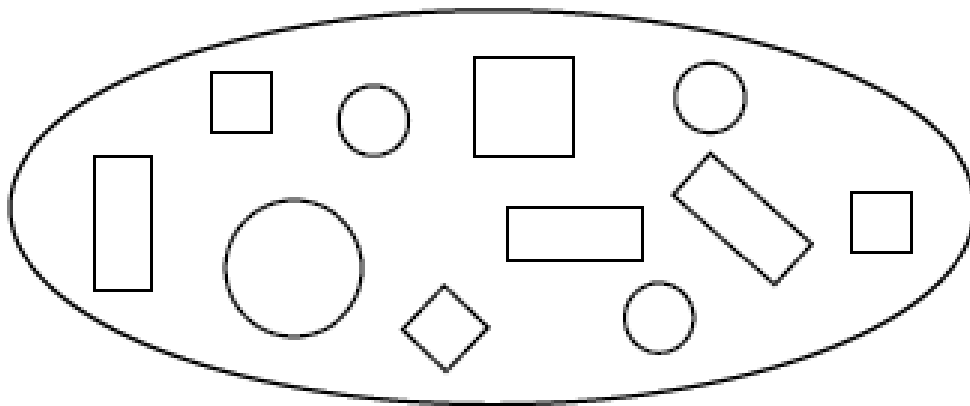
- Yellow



- Red



- Green



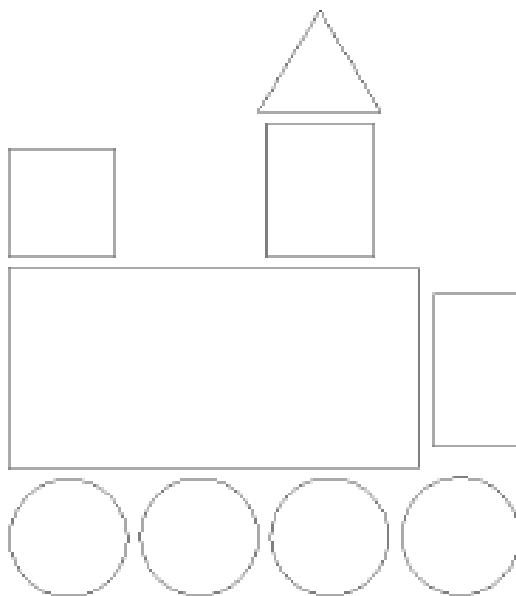
2. Put a tick (✓) in front of the correct statement and put a cross (X) in front of the false statement.

1. All the sides of the square are equal in length. ()
2. Triangle has three corners. ()
3. Opposite sides of the rectangle are equal. ()
4. Circle is a closed plane figure. ()
5. "Dice" is similar to the shape of a square. ()

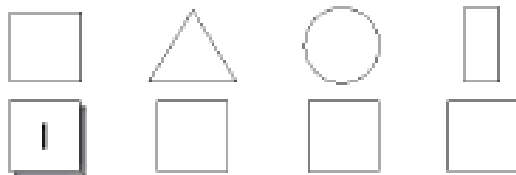
3. Count the number of shapes in each type, write the count in the space

provided and colour the shapes.

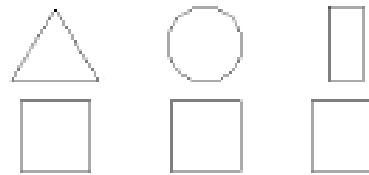
 = yellow  = green  = purple  = blue



How many?




How many?



4. Draw and write the name of the shapes to the correct descriptions.


1. This shape has 4 straight edges that are equal in length and has 4 corners.

It is a




2. This shape has 4 straight edges; 2 of them are longer and 2 of them are shorter. It also has 4 corners.

It is a



3. This shape has 3 straight edges and 3 corners.

It is a



4. This shape has no straight edges, only curved edge. It has no corners.

5. It is a

